
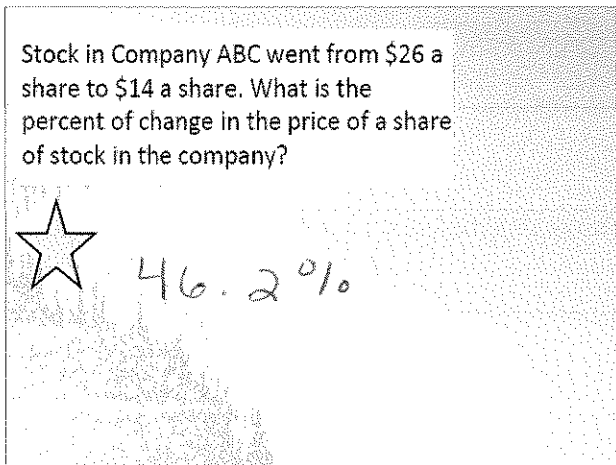


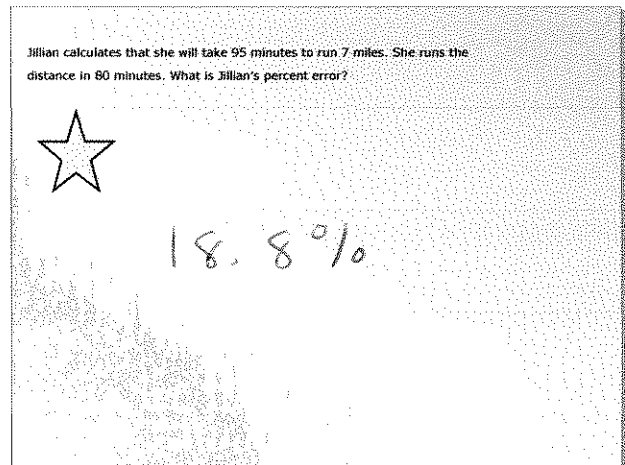
May 6-2:34 PM



May 6-2:37 PM




May 6-3:21 PM



May 6-2:39 PM


A real estate agent earned a commission of \$6875 for selling a house. If his rate is 2.5%, find the selling price of the house.



\$ 275,000

May 6-2:37 PM


A snowmobile priced at \$2,800 is on sale for 20% off. The sales tax rate is 8.25%. What is the sale price including tax?



\$ 2424.80

May 6-3:14 PM


John is selling sets of knives and makes a 10% commission on all sales. What would his commission be on the sale of a \$3250 set of knives?



\$ 325

May 6-2:36 PM


Roberta makes \$9 an hour plus a 12.5% commission selling jewelry. How much does she earn on an 8 hour shift in which she sells \$300 worth of jewelry?



\$ 119.50

May 6-2:37 PM


A bicycle is on sale for \$189.50. The sales tax rate is 5%. What is the total price?



\$198.98

May 6-3:13 PM


A piece of property in Ciudad Sandino, Nicaragua increased in value from \$60,000 to \$84,000 in five years. What was the percent increase?



40%

May 6-3:11 PM


Today, the price of a new cell phone is \$129. In 2000, the price of a similar cell phone was \$240. What is the percent of change in the price of a cell phone from 2000 to today?



46.25%

May 6-3:21 PM


The Rodriguez family went to dinner at Pasta Palace. Mr. Rodriguez ordered a meal for \$6.25; Mrs. R ordered a meal for \$7.50; the 2 children ordered individual pizzas for \$4.99 each. The sales tax rate was 7.25% and they left a 15% tip. How much was the total bill?



\$29.27

May 6-3:14 PM


There were 134 people in attendance at the school football game last Friday. This week there were 246 people in attendance at the school football game. What is the percent of change from last week to this week?



83.6%

May 6-3:20 PM

Sabrina calculates the cost of book as \$50. The actual price was \$56. What is Sabrina's percent error?



10.7%

May 6-3:29 PM